


かけざん 7のだん

ねん 年 くみ 組

なまえ 名前

1はこにいちごが7こずつ入っています。はこは、何はこかあります。いちごの数をしらべましょう。



$$\square \times \square = \square$$






$$\square \times \square = \square$$






$$\square \times \square = \square$$






$$\square \times \square = \square$$




$$\square \times \square = \square$$





$$\square \times \square = \square$$







$$\square \times \square = \square$$



$$\square \times \square = \square$$





$$\square \times \square = \square$$