


かけざん 4のたん

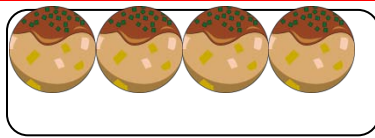
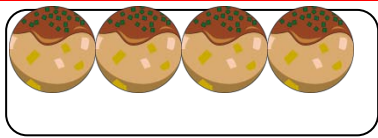
ねん 年 くみ 組

なまえ 名前

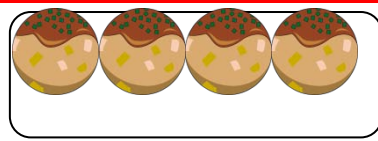
1さらにたこやきが4こずつ入っています。さらは、何さらかあります。たこやきの数をしらべましょう。



かけられるかず	×	かけるかず	=	こたえ
<input type="text"/>	×	<input type="text"/>	=	<input type="text"/>



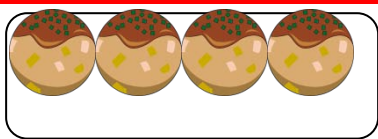
<input type="text"/>	×	<input type="text"/>	=	<input type="text"/>
----------------------	---	----------------------	---	----------------------



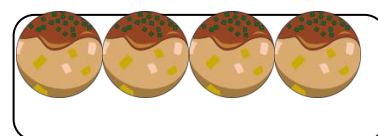
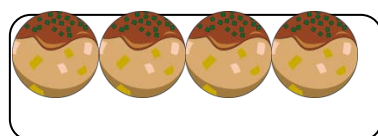
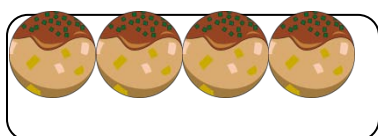
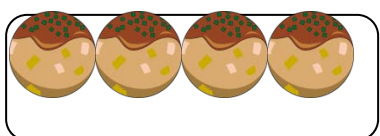
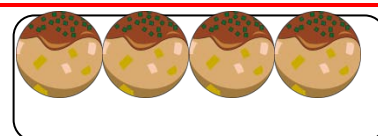
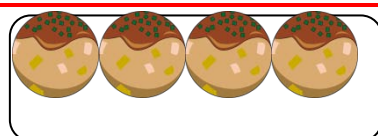
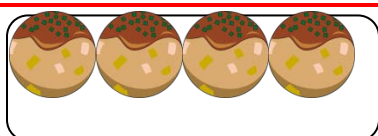
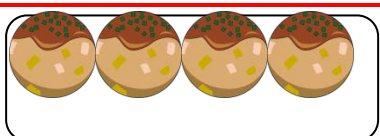
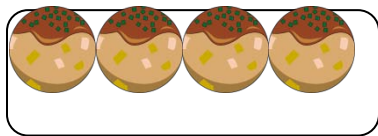
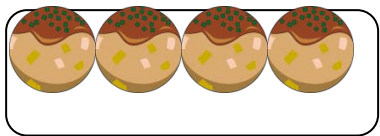
<input type="text"/>	×	<input type="text"/>	=	<input type="text"/>
----------------------	---	----------------------	---	----------------------



<input type="text"/>	×	<input type="text"/>	=	<input type="text"/>
----------------------	---	----------------------	---	----------------------



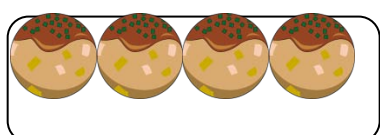
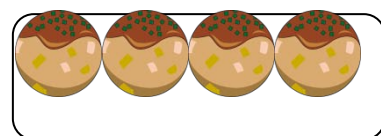
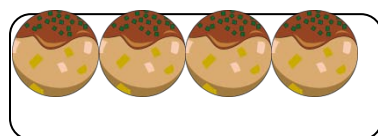
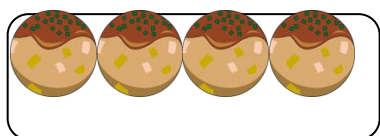
<input type="text"/>	×	<input type="text"/>	=	<input type="text"/>
----------------------	---	----------------------	---	----------------------



$$\square \times \square = \square$$

$$\square \times \square = \square$$

$$\square \times \square = \square$$



$$\square \times \square = \square$$